

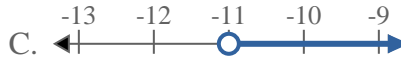


Solve each problem.

1) Which option best shows $X > -16$



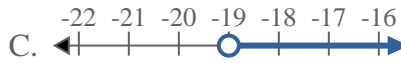
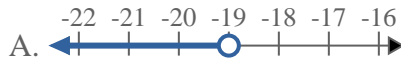
2) Which option best shows $X \geq -11$



3) Which option best shows $X \leq -18$



4) Which option best shows $X > -19$



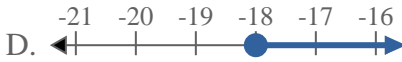
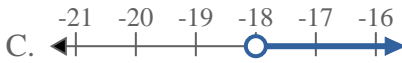
5) Which option best shows $X < -15$



6) Which option best shows $X \leq 13$



7) Which option best shows $X > -18$



8) Which option best shows $X < -6$



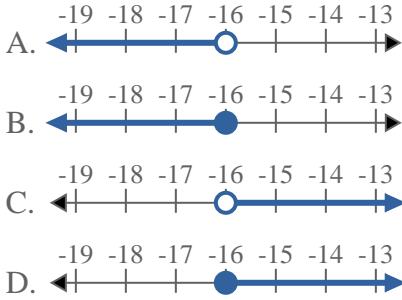
Answers

1. _____
2. _____
3. _____
4. _____
5. _____
6. _____
7. _____
8. _____

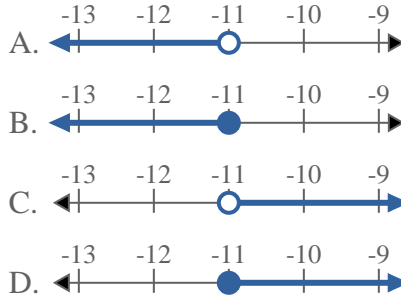


Solve each problem.

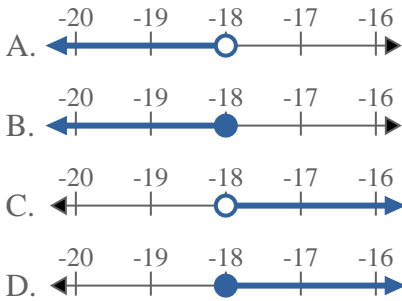
1) Which option best shows $X > -16$



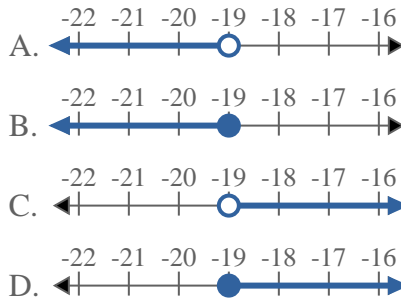
2) Which option best shows $X \geq -11$



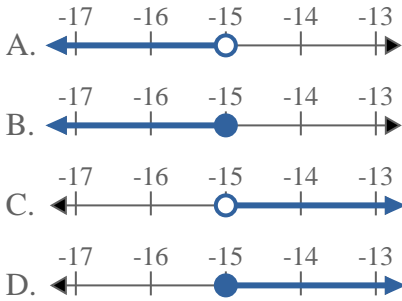
3) Which option best shows $X \leq -18$



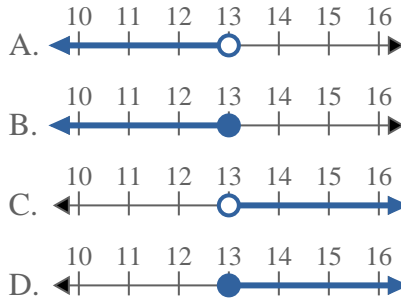
4) Which option best shows $X > -19$



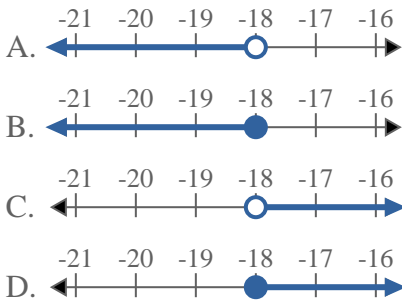
5) Which option best shows $X < -15$



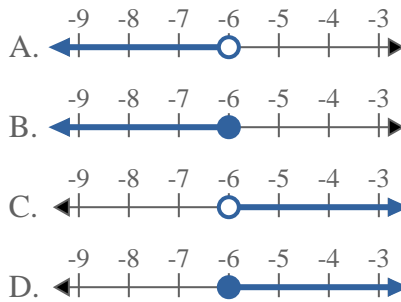
6) Which option best shows $X \leq 13$



7) Which option best shows $X > -18$



8) Which option best shows $X < -6$



Answers

1. **C**
2. **D**
3. **B**
4. **C**
5. **A**
6. **B**
7. **C**
8. **A**